

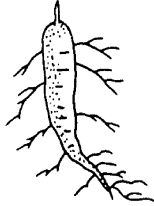

Worksheet

Comparison of Monocot and Dicot Structures


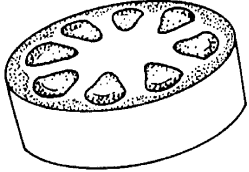
Procedure:

Indicate whether the picture represents (a) **monocot** or **dicot** and (b) state the characteristic for which you based your decision.



1. Roots

<p>a.</p> <p>b.</p>		<p>a.</p> <p>b.</p>	
---------------------	---	---------------------	---



2. Stems

<p>a.</p> <p>b.</p>		<p>a.</p> <p>b.</p>	
---------------------	---	---------------------	---

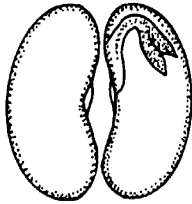

3. Leaves

<p>a.</p> <p>b.</p>		<p>a.</p> <p>b.</p>	
---------------------	---	---------------------	---

4. Flowers

<p>a.</p> <p>b.</p>		<p>a.</p> <p>b.</p>	
---------------------	---	---------------------	---

5. Seeds

<p>a.</p> <p>b.</p>		<p>a.</p> <p>b.</p>	
---------------------	---	---------------------	---